

8. What does a boat travel through?

- a) land b) air c) water d) railway

9. _____ needs less water than other animals.

- a) Polar bear b) Elephant c) Camel d) fish

10. Which of the following insects spoils our stored food grains?

- a) butterfly b) honeybee c) mosquito d) ant

B. Fill in the blanks.

(5)

1. People who fly aeroplanes are called _____.

2. The insects that fly have _____.

3. You need me when you are sick. I am _____.

4. Air has no _____, _____ and colour.

5. If the sun is to our left, our shadow will be to our _____.

C. Write True or False.

(5)

1. Animals will not become sick in the hot sun without water. _____

2. We feel hot when we stand in the shadow of a tree. _____

3. We eat the stem of an onion plant. _____

4. Ants live in colonies. _____

5. We can feel air. _____

D.Match the following

(2)

1. Speed limit



2. No left turn



3. No U turn



4. Uneven road



E.Answer the following questions.

Q1. What do traffic police ensure?

(1)

Q2.Name one popular drink that we get from plants.

(1)

Q3.Name any two public transport vehicles.

(2)

a. _____

b. _____

Q4.Write two uses of beeswax.

(2)

Q5.Name two plants used to prepare medicines.

(2)

a. _____

b. _____

Q6.Why does a burning candle go out if we cover it with a glass ? (2)

Q7. Why are our spectacles made of glass?

(2)

Q8.What is a drought?

(2)

Q9. Name any two things we get from plants that we use in our food.(2)

a. _____

b. _____

Q10. Write the steps to make chocolate.

(3)

Q11. The tubes used in swimming pools float on water. Give reasons. (3)

Q12. What may happen if we do not get water to bath or wash our clothes?(3)

F. Name the following :

(5)

1. A means of transport that we use on land.

2. An insect that cannot fly.

3. A storm that brings heavy rain and lightning.

4. One word for gentle wind.

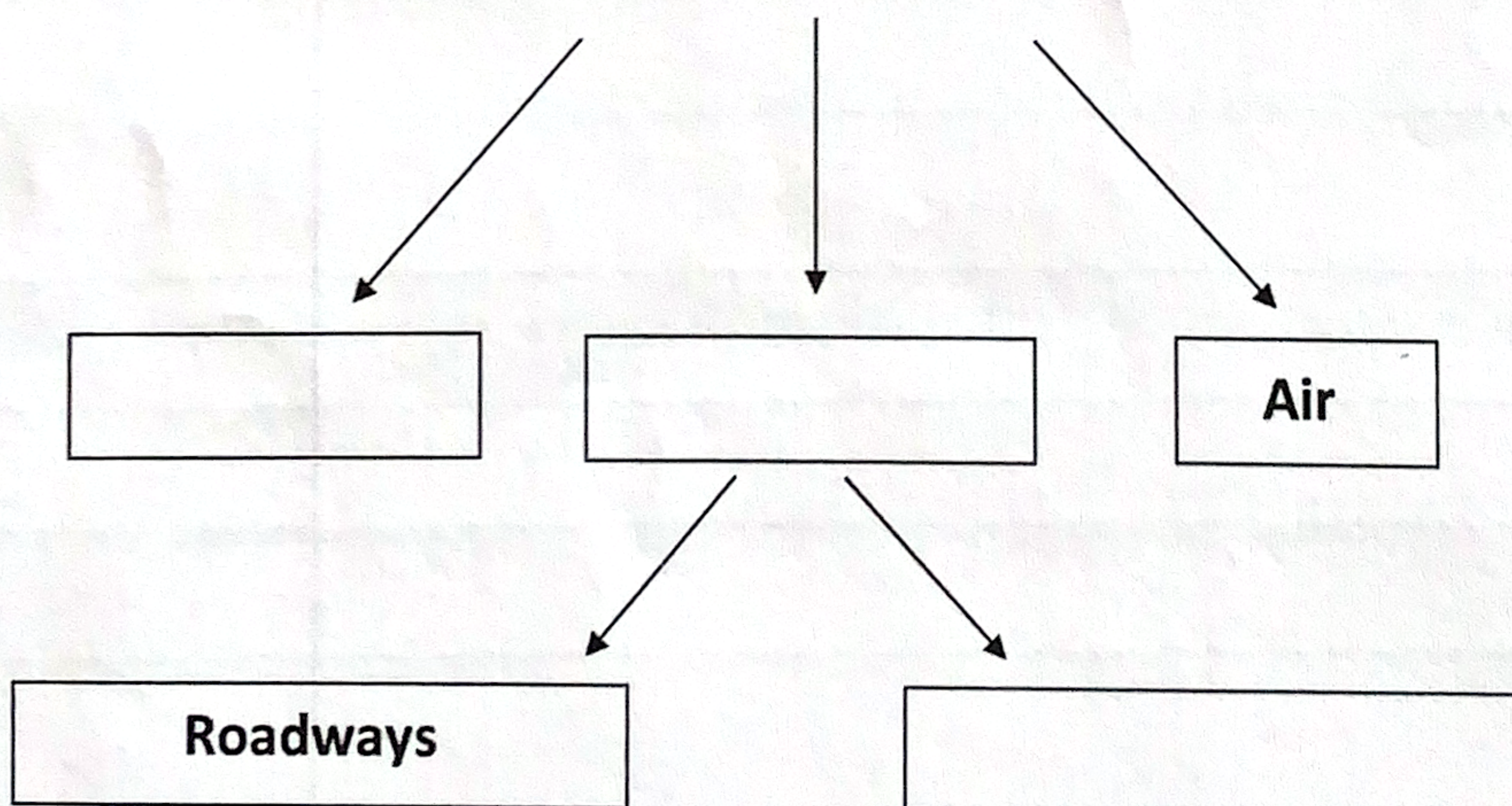
5. What does the following picture show?



G.





Types / means of transportation

(3)



H. Choose the correct words from the brackets and complete the following table. (2)

(thunderstorm , dust storm, snowstorm, sandstorm,rainstorm)

Types of storms	
	<hr/>
	<hr/>
	<hr/>
	<hr/>

I. Draw and label the life cycle of a butterfly.

(3)